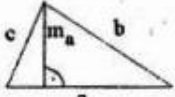
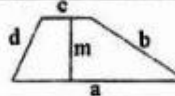
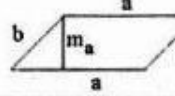
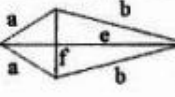
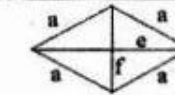

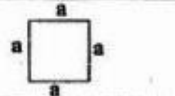
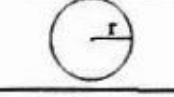
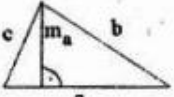
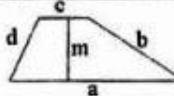
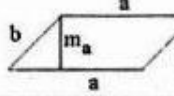
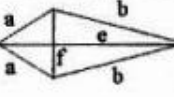
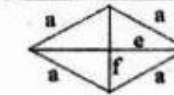

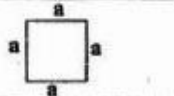
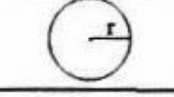


SÍKIDOMOK KERÜLETE, TERÜLETE

Síkídom		Kerület(K)	Terület(T)
Háromszög		$K = a+b+c$	$T = \frac{a \cdot m_a}{2} = \frac{b \cdot m_b}{2} = \frac{c \cdot m_c}{2}$
Trapéz		$K = a+b+c+d$	$T = \frac{a+c}{2} \cdot m$
Paralelogramma		$K = 2 \cdot (a+b)$	$T = a \cdot m_a = b \cdot m_b$
Deltoid		$K = 2 \cdot (a+b)$	$T = \frac{e \cdot f}{2}$
Rombusz		$K = 4 \cdot a$	$T = \frac{e \cdot f}{2}$ $T = a \cdot m$
Téglalap		$K = 2 \cdot (a+b)$	$T = a \cdot b$
Négyzet		$K = 4 \cdot a$	$T = a^2$
Kör		$K = 2 \cdot r \cdot \pi$	$T = r^2 \cdot \pi$

Jelölések: a, b, c, d : oldalak
 m, m_a, m_b, m_c : magasság
 e, f : átlók
 r : sugár

SÍKIDOMOK KERÜLETE, TERÜLETE

Síkídom		Kerület(K)	Terület(T)
Háromszög		$K = a+b+c$	$T = \frac{a \cdot m_a}{2} = \frac{b \cdot m_b}{2} = \frac{c \cdot m_c}{2}$
Trapéz		$K = a+b+c+d$	$T = \frac{a+c}{2} \cdot m$
Paralelogramma		$K = 2 \cdot (a+b)$	$T = a \cdot m_a = b \cdot m_b$
Deltoid		$K = 2 \cdot (a+b)$	$T = \frac{e \cdot f}{2}$
Rombusz		$K = 4 \cdot a$	$T = \frac{e \cdot f}{2}$ $T = a \cdot m$
Téglalap		$K = 2 \cdot (a+b)$	$T = a \cdot b$
Négyzet		$K = 4 \cdot a$	$T = a^2$
Kör		$K = 2 \cdot r \cdot \pi$	$T = r^2 \cdot \pi$

Jelölések: a, b, c, d : oldalak
 m, m_a, m_b, m_c : magasság
 e, f : átlók
 r : sugár